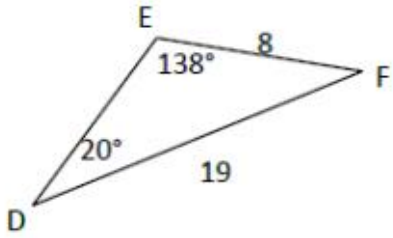
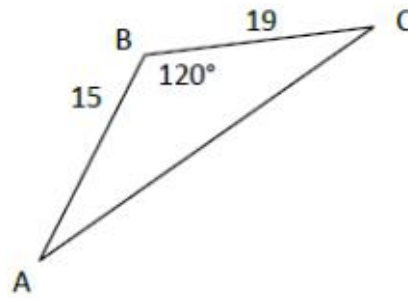


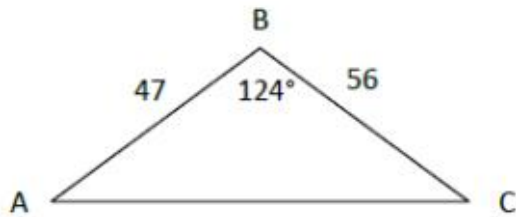
11. Find the missing dimensions of the triangle below. Round your answers to the nearest whole number.



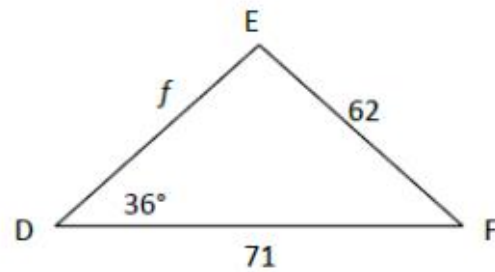
12. Find the $m\angle C$ to the nearest whole degree.



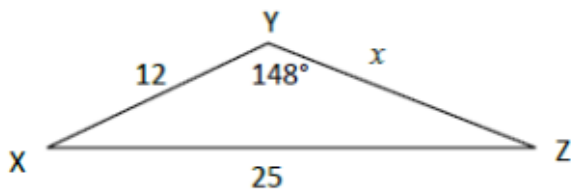
13. Find the missing dimensions of the triangle below. Round your answers to the nearest whole number.



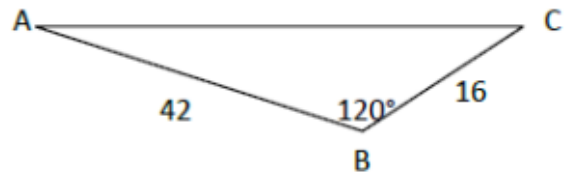
14. Find the f to the nearest whole number.



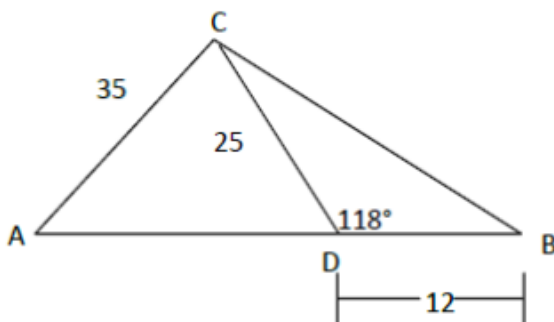
15. Find the x to the nearest whole number.



16. Find the $m\angle A$ to the nearest whole degree.



17. Find the $m\angle A$ to the nearest whole degree.



18. Find the $m\angle DGF$ to the nearest whole degree.

